

①.
$$\begin{array}{r} 5 \\ +4 \\ \hline \end{array}$$

②.
$$\begin{array}{r} 52 \\ -21 \\ \hline \end{array}$$

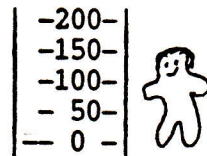
③. $12 : 00 =$ _____ o'clock

④. $6 \text{ } \underline{\hspace{1cm}} \text{ } 4 = 2$

⑤. Write the number after 5.

⑥. How much is 3 tens and 5 ones?

⑦. How tall is this child?




⑧. $8 + 2 =$ _____

DAY 106

①.
$$\begin{array}{r} 25 \\ +53 \\ \hline \end{array}$$

②.
$$\begin{array}{r} 42 \\ -11 \\ \hline \end{array}$$

③. Draw the hands for 4:00



④. $2 + 2 \text{ } \underline{\hspace{1cm}} \text{ } 4$

⑤. Which shape is first?



⑥. 47 is _____ tens and _____ ones.

⑦. Draw a square.

⑧. Circle the problem that is wrong.

$4 + 7 = 10$


$4 + 7 = 11$

DAY 107

①.
$$\begin{array}{r} 17 \\ +22 \\ \hline \end{array}$$

②. $18 - 9 =$ _____

③. Draw the hands for 11:00



④. $6 \text{ } \underline{\hspace{1cm}} \text{ } 9$
($<$, $>$)


⑤. Which shape is second?



⑥. Fill in the blanks:
5, 10, 15, 20, _____, _____, _____

⑦. Complete this pattern:

⑧. Use the bar graph to tell how many chickens are on the farm.



DAY 108