


①.  $9 + 6 = \underline{\quad}$

②.  $16 - 8 = \underline{\quad}$

③. What time?

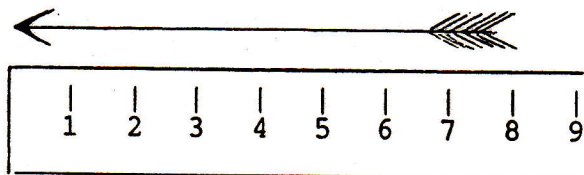
④.  $27 \begin{array}{r} \phantom{0} \\ (<, >) \end{array} 16$

⑤. Copy: one 1  
two 2  
three 3  
four 4  
five 5  
six 6  
seven 7  
eight 8  
nine 9



⑥. How much is four tens?

⑦. How long is this arrow?



⑧. Dime + Dime + Nickel =  $\underline{\quad}$ ¢

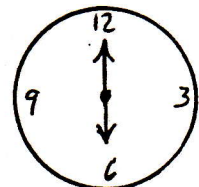
DAY 109

①.  $\begin{array}{r} 20 \\ +30 \\ \hline \end{array}$

②.  $\begin{array}{r} 58 \\ -15 \\ \hline \end{array}$

③. What time?

Answer:  $\underline{\quad}:\underline{\quad}$



④.  $2 + \underline{\quad} = 8$

⑤. Write the number before 9.

⑥. How much is four tens and two ones?

⑦. Draw a triangle.

⑧. Finish this 30 day calendar.

1	_____	_____	_____	_____	_____	7
8	_____	_____	_____	_____	_____	14
15	_____	_____	_____	_____	_____	21
22	_____	_____	_____	_____	_____	28
29	_____					

DAY 110