


①.
$$\begin{array}{r} 18 \\ +30 \\ \hline \end{array}$$

②.
$$\begin{array}{r} 70 \\ -50 \\ \hline \end{array}$$

③. Draw on a clock face:
7:30




④.
$$\begin{array}{c} 3 \quad \underline{\quad} \quad 5 \\ (>, <) \end{array}$$

⑤. Which is first?
A, B, C, D, E

⑥. How much is 2 tens?

⑦. Complete this pattern.



⑧. Copy the statement that is correct.

$5 + 4 = 10$

$5 + 4 = 9$


DAY 117

①.
$$\begin{array}{r} 42 \\ +37 \\ \hline \end{array}$$

②.
$$\begin{array}{r} 76 \\ -6 \\ \hline \end{array}$$

③. Draw the money you need to buy this.

37 ¢

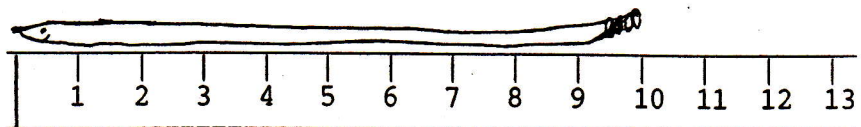


④. What days of this month are on Tuesday?

⑤. Which letter is second?
A, B, C, D

⑥. How much is 9 tens and 8 ones?

⑦. How long is this snake?



⑧. Number from 1 to 20.

DAY 118