


$$\begin{array}{r} 1. \quad 15 \\ +40 \\ \hline \end{array}$$

2.
$$\begin{array}{r} 75 \\ -22 \\ \hline \end{array}$$

③ Draw the money you need to buy this.

43 ¢ Q



④. $\begin{matrix} 9 & 9 \\ (\overline{<}, =, >) \end{matrix}$

5. Copy:

one	1
two	2
three	3
four	4
five	5
six	6
seven	7
eight	8
nine	9
ten	10
eleven	11

⑥ 11 is tens and ones.

⑦. Draw a square.

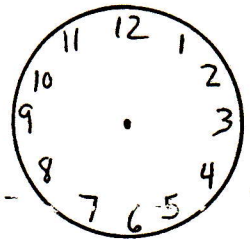
8. Write all the numbers to 30.

DAY 119

$$\begin{array}{r} 19 \\ + 0 \\ \hline \end{array}$$

$$\begin{array}{r} 11 \\ - 6 \\ \hline \end{array}$$

③ Draw the hands for 12:00

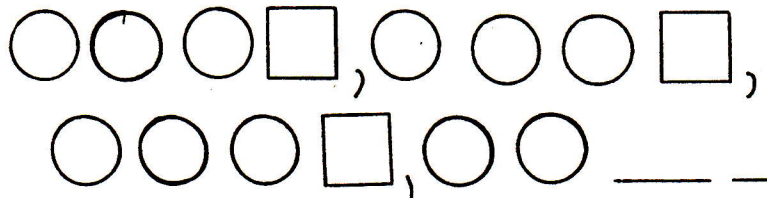


④. - 3 = 6

⑤ Write the number after 10.

6. Fill in the blanks:
5, 10, 15, ____, ____, ____, ____.

⑦. Complete this pattern:



⑧ quarter + nickel = 15¢

DAY 120