

① $\begin{array}{r} 5 \\ +5 \\ \hline \end{array}$

② $8 - 4 = \underline{\quad}$

③ Fill in the series:
0, 10, , , , 50, , 70, 80, , 100

④ How much water? \longrightarrow



⑤ Circle the 11 on the test tube.

⑥ Circle the greater than sign. $< = >$

⑦ Circle the greater.

$\textcircled{25\text{¢}}$ $\textcircled{1\text{¢}}$

⑧ $\begin{array}{c} \triangle \\ 6 \\ 4 \quad 2 \end{array} \quad \underline{\quad} + \underline{\quad} = \underline{\quad} \quad \underline{\quad} - \underline{\quad} = \underline{\quad}$

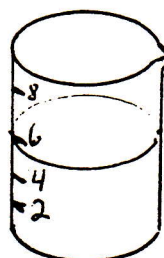
DAY 32 $\underline{\hspace{10cm}}$

① $\begin{array}{r} 7 \\ +3 \\ \hline \end{array}$

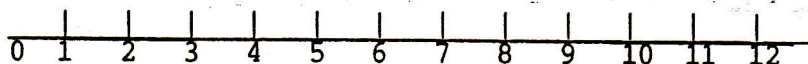
② $\begin{array}{r} 5 \\ -4 \\ \hline \end{array}$

③ Fill in the series: 5, 10, , 20, 25,

④ How much water? \longrightarrow



⑤



Circle the thirteen.

⑥ Circle the less than sign.

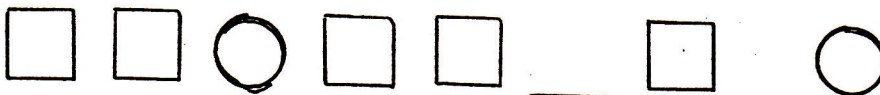
$< = >$

⑦ Circle the greater.

$\textcircled{\text{DIME}}$

$\textcircled{\text{PENN.}}$

⑧ Complete the pattern.



DAY 33 $\underline{\hspace{10cm}}$