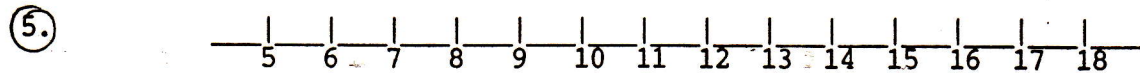



1. $8 + 2 = \underline{\hspace{2cm}}$

$$\begin{array}{r} 2.7 \\ -6 \\ \hline \end{array}$$

③. Fill in the series: 5, __, 15, __, 25, __, 35, __, 45

④ Is this empty or full?.



Circle the sixteen.

(6.) Circle the addition sign.

⑦. Circle the lesser.

$$< = > + -$$

penny

dime

⑧ Write the number word for 3.

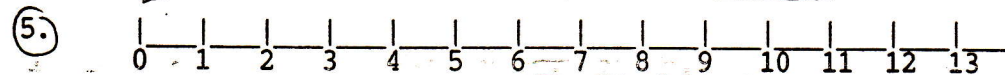
DAY 34

$$\begin{array}{r} 1 \\ +9 \\ \hline \end{array}$$

②. $4 - 4 = \underline{\hspace{2cm}}$

③. Fill in the series:
5, 10, 15, 20, __, 30, __, 40, 45, __


④. How long is the fork?



Circle the twelve.

6. Circle the subtraction sign.

7. Draw 2 o'clock.

$$< = > + -$$


⑧. Write the number word for 2.

DAY 35