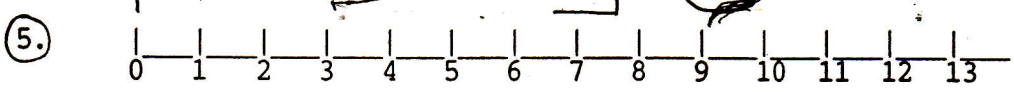



①
$$\begin{array}{r} 3 \\ + 6 \\ \hline \end{array}$$

② $9 - 3 = \underline{\quad}$

③ Fill in the series:
5, 10, 15, 20, , 30, 40, , 50, 55, , 65

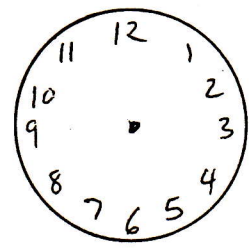
④ How tall is the girl?



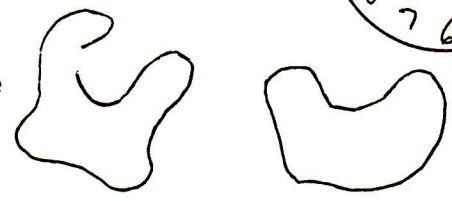
Circle the eleven.

⑥ Find the equal numbers.
 $11 = 0$ $13 = 13$

⑦ Draw 5 o'clock.



⑧ Copy and put an x on the closed curve



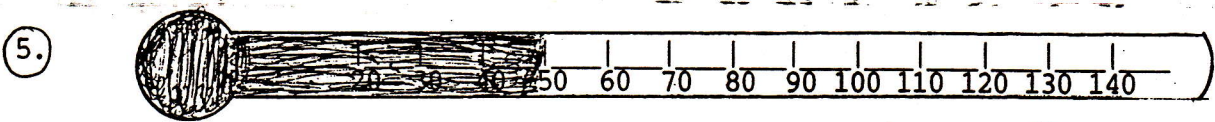
DAY 36 _____

①
$$\begin{array}{r} 1 \\ + 7 \\ \hline \end{array}$$

② $8 - 0 = \underline{\quad}$

③ Fill in the series:
5, 15, 20, , 30, , 40, , 50, 60, 70, , 80


④ What is the temperature?



Copy the thermometer and circle the sixty.

⑥ Copy the equal numbers.
 $3 = 7$ $7 = 7$

⑦ Draw 6 o'clock



⑧
$$\begin{array}{r} 57 \\ 2 \end{array} \begin{array}{l} + \\ - \end{array} \begin{array}{l} \underline{\quad} \\ \underline{\quad} \end{array} = \begin{array}{l} \underline{\quad} \\ \underline{\quad} \end{array}$$

DAY 37 _____