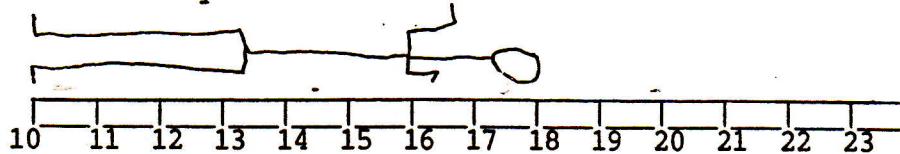


① 
$$\begin{array}{r} 10 \\ + 0 \\ \hline \end{array}$$

②  $6 - 2 = \underline{\quad}$

③ Fill in the sequence: 30, 40,     , 60,     , 80


④ How tall is the boy?



⑤ Write an eighteen.

⑥ Find the equal numbers.  
 $0 = 7$        $14 = 14$

⑦ Draw 8 o'clock.



⑧ Draw a closed curve.


DAY 40 \_\_\_\_\_

① 
$$\begin{array}{r} 9 \\ + 1 \\ \hline \end{array}$$

②  $8 - 5 = \underline{\quad}$

③ Fill in the series: 0, 1,     ,     , 4,     ,     , 7,     ,     , 10,     ,     , 13,     ,  
    , 16,     ,     , 19, 20,     , 22,     , 24, 25,     , 27.

④ How deep is the swimming pool?



-7  
-6  
-5  
-4  
-3  
-2  
-1  
-0

⑤ Write a three.

⑥ Fill in the blank: < >  
 1      0

⑦ Which is first?  
 A B C D

⑧ Write the number word for 9.

DAY 41 \_\_\_\_\_