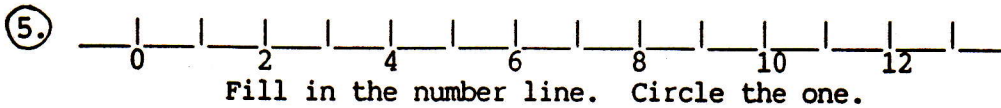


① 
$$\begin{array}{r} 14 \\ + 1 \\ \hline \end{array}$$

②  $9 - 7 = \underline{\quad}$


③  $1 + 1 + 1 = \underline{\quad}$

④ Number from 1 to 10.



⑥ Fill in the blank.  $< >$   
10  $\underline{\quad}$  4

⑦ Which is fifth?  
A B C D E

⑧ Copy: 

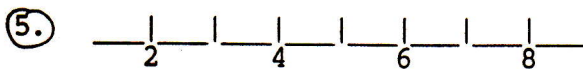
DAY 45

① 
$$\begin{array}{r} 15 \\ + 1 \\ \hline \end{array}$$

②  $13 - 3 = \underline{\quad}$

③  $2 + 1 + 1 = \underline{\quad}$

④ Number from 5 to 15.



Fill in the number line. Circle the three.

⑥ Fill in the blank.  $< >$   
2  $\underline{\quad}$  3

⑦ Which is last?  
W X Y Z

⑧ Draw an open curve.

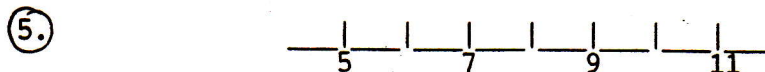
DAY 46

① 
$$\begin{array}{r} 18 \\ + 1 \\ \hline \end{array}$$

②  $14 - 7 = \underline{\quad}$

③  $3 + 1 + 1 = \underline{\quad}$

④ 
$$\begin{array}{r} 5 \text{ cars} \\ + 4 \text{ cars} \\ \hline \end{array}$$

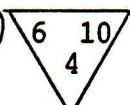


Fill in the number line. Circle the six.

⑥ Fill in the blank.  $< >$   
7  $\underline{\quad}$  9

⑦ Which is first?

A  
B  
C  
D

⑧   $\underline{\quad} - \underline{\quad} = \underline{\quad}$   $\underline{\quad} + \underline{\quad} = \underline{\quad}$

DAY 47