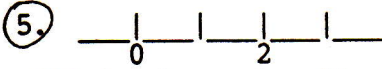


①.
$$\begin{array}{r} 7 \\ +6 \\ \hline \end{array}$$

②. $12 - 5 = \underline{\quad}$

③. Write the number that comes before 5.

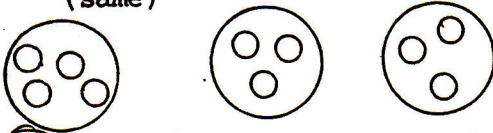
④. $1 + \underline{\quad} = 5$ $4 + \underline{\quad} = 5$ $5 = \underline{\quad} = 4$ $5 - \underline{\quad} = 1$



Fill in the number line. Circle the one.

⑥. Circle the equal sets.
(same)

⑦. Choose + or - :
 $9 \underline{\quad} 5 = 4$



⑧. Finish this 31 day calendar

1	2	3	4	5	_____	_____
8	_____	_____	_____	_____	_____	_____
15	_____	_____	_____	_____	_____	_____
22	_____	_____	_____	_____	_____	_____
29	_____	_____	_____	_____	_____	_____

DAY 66 _____

①.
$$\begin{array}{r} 5 \\ +9 \\ \hline \end{array}$$

②. $13 - 6 = \underline{\quad}$

③. Write the number that comes before 10.

④. $1 + \underline{\quad} = 3$ $\underline{\quad} = 2 = 3$ $3 - \underline{\quad} = 2$ $3 - 1 = \underline{\quad}$




Fill in the number line. Circle the three.

⑥. Copy and circle the equal numbers.
19 13 19

⑦. Choose + or - :
 $10 \underline{\quad} 3 = 7$

⑧. How long is the rabbit picture in centimeters?



DAY 67 _____