

①  $\begin{array}{r} 7 \\ +5 \\ \hline \end{array}$

②  $\begin{array}{r} 60 \\ -10 \\ \hline \end{array}$

③ 10¢

Circle the name:  
nickle dime quarter

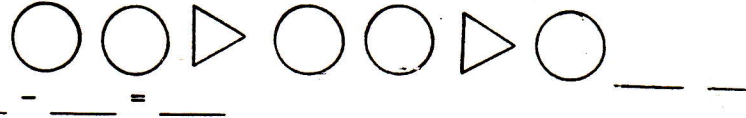
④  $2 + 3 \underline{\hspace{1cm}} 5$

⑤ Which letter is fourth?  
A, B, C, D, E, F, G

⑥ Write the number for 3 tens.

⑦ Finish this pattern:

⑧  $\begin{array}{c} \triangle \\ \hline 10 \\ 6 \quad 4 \end{array} \quad \underline{\hspace{1cm}} + \underline{\hspace{1cm}} = \underline{\hspace{1cm}}$



DAY 84

①  $7 + 6 =$

②  $\begin{array}{r} 60 \\ -20 \\ \hline \end{array}$

③

Circle the name:  
dime quarter penny

1¢

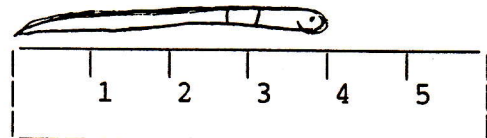
④  $6 \underline{\hspace{1cm}} 4 = 10$

⑤ Which shape is third?



⑥ How much is two tens and two ones?

⑦ How long is the worm?



⑧ Copy:

$\square, +, -, =$

DAY 85

①  $\begin{array}{r} 36 \\ +12 \\ \hline \end{array}$

②  $\begin{array}{r} 25 \\ -13 \\ \hline \end{array}$

③

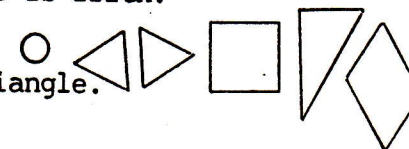
one  
nickle =   ?   ¢

④  $9 \underline{\hspace{1cm}} 3 = 6$ . Use + or - .

⑤ Which shape is fifth?

⑥ What number is after 30?

⑦ Draw a triangle.



⑧ Copy the numbers

1 2 3 4 5

DAY 86