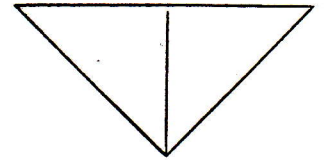


①. $9 + 4 =$

②.
$$\begin{array}{r} 25 \\ -13 \\ \hline \end{array}$$

③. Copy and color $\frac{1}{2}$:



④. $5 + 3$ ___ 8 Use $>$, $=$, $<$

⑤. Copy: six 6
seven 7
eight 8
nine 9
ten 10

⑥. Fill in the blanks:
 5 , ___ 15 , 20 , ___, 30

⑦. Draw a square.

⑧. Write the numbers:


___ , ___ , ___ , 9 , 10

DAY 89

①.
$$\begin{array}{r} 17 \\ +71 \\ \hline \end{array}$$

②.
$$\begin{array}{r} 26 \\ -4 \\ \hline \end{array}$$

③. Color $\frac{1}{4}$:



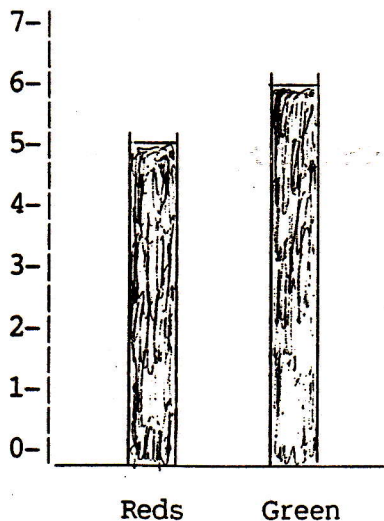
④. 9 ___ $3 = 12$. Use $+$ or $-$.

⑤. What number comes before 2?

⑥. How much is 6 tens and 2 ones?

⑦. Fill in the blank:

⑧. Use the bar graph to tell how many kids were on the Reds Team.



☐
☐
☐
☐
☐
☐

DAY 90