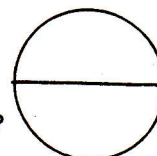


①.  $\begin{array}{r} 74 \\ + 4 \\ \hline \end{array}$

②.  $\begin{array}{r} 29 \\ - 5 \\ \hline \end{array}$

③. Copy and color  $\frac{1}{2}$ :

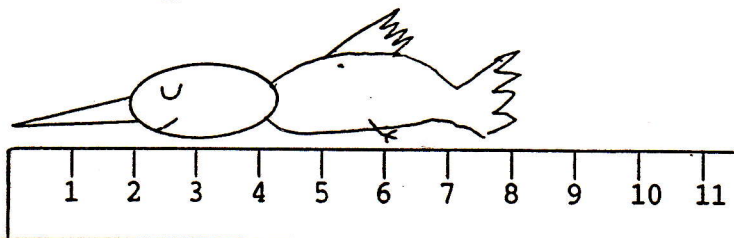


④.  $3 \text{ } \underline{\hspace{1cm}} \text{ } 9 = 12$

⑤. What number is before 4?

⑥. 58 is     tens and     ones.

⑦. How long is the bird?



⑧. Complete:

11 12     14 15

DAY 91

①.  $\begin{array}{r} 83 \\ + 3 \\ \hline \end{array}$

②.  $\begin{array}{r} 33 \\ - 2 \\ \hline \end{array}$

③.

one quarter =     ¢

④. Look at the class calendar.  
What weekday is the 20th?

⑤. Which is third?  
A, B, C, D, E

⑥. Fill in the blanks:  
2, 4, 6, 8, 10, 12,    , 16

⑦. Draw a circle.

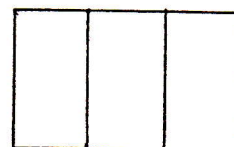
⑧. 1 dime =     nickels

DAY 92

①.  $\begin{array}{r} 13 \\ + 14 \\ \hline \end{array}$

②.  $\begin{array}{r} 80 \\ - 20 \\ \hline \end{array}$

③. Copy and color  $\frac{1}{3}$ :

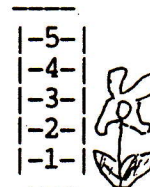


④.  $10 \text{ } \underline{\hspace{1cm}} \text{ } 5 = 5$

⑤. Copy: one 1  
two 2  
three 3  
four 4  
five 5  
six 6

⑥. How much is 5 tens  
and three ones?

⑦. How tall is the flower?



⑧. Complete the pattern

   ,    , 30, 40, 50,    ,    ,    , 90, 100.

DAY 93