

① $\begin{array}{r} 14 \\ + 5 \\ \hline \end{array}$

② $\begin{array}{r} 79 \\ - 16 \\ \hline \end{array}$

③ Copy and color $\frac{1}{4}$:


④ $8 \text{ } \underline{\hspace{1cm}} \text{ } 3 = 5$

⑤ Which shape is fourth?

⑥ How much is 7 tens?

⑦ How much does the apple weigh?

⑧ 1 quarter = $\underline{\hspace{1cm}}$ nickels



DAY 97

① $9 + 6 =$

② $\begin{array}{r} 67 \\ - 11 \\ \hline \end{array}$

③ Copy and color $\frac{1}{3}$:


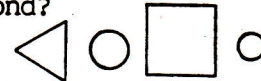
④ $7 + \underline{\hspace{1cm}} = 9$

⑤ Which shape is second?

⑥ How much is 1 ten and 9 ones?

⑧ Use the bar graph to tell how many inches it rained on Wednesday.

⑦ Draw a triangle.



DAY 98

① $\begin{array}{r} 31 \\ + 58 \\ \hline \end{array}$

② $\begin{array}{r} 19 \\ - 6 \\ \hline \end{array}$

③ A quarter = $\underline{\hspace{1cm}}$ C

④ What weekday is the third of this month?

⑤ Copy: one 1
two 2
three 3
four 4
five 5
six 6

⑥ 17 is $\underline{\hspace{1cm}}$ tens and $\underline{\hspace{1cm}}$ ones.

⑦ Complete this pattern:

⑧ Finish this 31 day calendar.

1	2	3	
8			
15			
22			
29			



DAY 99