

① $\begin{array}{r} \$6.49 \\ +1.83 \\ \hline \end{array}$


② $\begin{array}{r} 75 \\ -48 \\ \hline \end{array}$

③ $8 \times 3 =$

④ $7 \overline{)49}$

⑤ Write the standard number for 9 hundreds no tens and 4 ones.

⑥ What fraction is shown?



$\frac{1}{3}, \frac{1}{2}, \frac{1}{4}$

Day 144

① $\begin{array}{r} \$.79 \\ - .23 \\ \hline \end{array}$

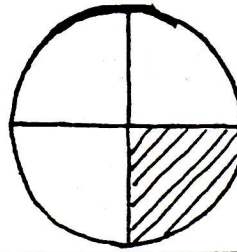
② $\begin{array}{r} \$.62 \\ - .35 \\ \hline \end{array}$

③ $7 \times 8 =$

④ $7 \overline{)54}$

⑤ $6 \times \underline{\quad} = 48$

⑥ What fraction is shown?



$\frac{1}{3}, \frac{1}{2}, \frac{1}{4}$

Day 145

① $\begin{array}{r} \$7.43 \\ +2.85 \\ \hline \end{array}$

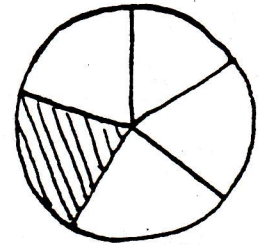
② $\begin{array}{r} \$2.54 \\ -1.42 \\ \hline \end{array}$

③ $8 \times 5 =$

④ $7 \overline{)63}$

⑤ For 219, what number is in the tens place?

⑥ What fraction is shown? $\frac{1}{3}, \frac{1}{5}, \frac{1}{4}$



Day 146

① $\begin{array}{r} \$9.57 \\ +4.25 \\ \hline \end{array}$

② $\begin{array}{r} 633 \\ -498 \\ \hline \end{array}$

③ $\begin{array}{r} 9 \\ \times 6 \\ \hline \end{array}$

④ $8 \overline{)48}$

⑤ Joe has 6 boxes of pencils. If each box has 8 pencils, how many pencils does he have.

⑥ 450, 460, 470, , ,

Day 147

① $\begin{array}{r} 983 \\ +645 \\ \hline \end{array}$

② $\begin{array}{r} \$5.43 \\ -2.81 \\ \hline \end{array}$

③ $6 \times 7 =$

④ $9 \overline{)81}$

⑤ For 219, what number is in the ones place?

⑥ Is 57 closer to 50 or 60 ?

Day 148