

① Write in order, largest first: 35, 27, 52, 24, 37

② $8 + 8 =$ ③ $10 + 55 + 31 =$ ④ $14 - 5 =$ ⑤ $\begin{array}{r} 800 \\ -500 \end{array}$

⑥ $1 + 1 + 1 + 1 + 1 + 1 =$

⑦ How much money is in a penny and two nickels?

⑧ How many paper clips long?

Day 39

① Write in order, smallest to largest: 106, 117, 102, 112, 125

② $\begin{array}{r} 4\text{¢} \\ +6\text{¢} \end{array}$ ③ $\begin{array}{r} 413 \\ +254 \end{array}$ ④ $\begin{array}{r} 645 \\ -423 \end{array}$ ⑤ $\begin{array}{r} 10 \\ -9 \end{array}$

⑥ Put in the missing number: 1, 2, 3, 4, __, 6, 7, 8

⑦ How much money is in three dimes and three pennies?

⑧ How many paper clips long?

Day 40

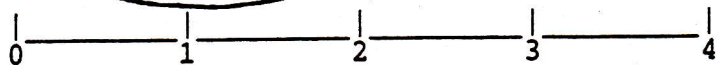
① Number from 125 to 139.

② $\begin{array}{r} 5 \\ +3 \end{array}$ ③ $\begin{array}{r} \$5.05 \\ +2.63 \end{array}$ ④ $\begin{array}{r} 11 \\ -7 \end{array}$ ⑤ $\begin{array}{r} 563 \\ -142 \end{array}$

⑥ $\begin{array}{r} 2 \\ 2 \\ 2 \\ 2 \\ 2 \\ 2 \\ 2 \\ +2 \end{array}$ ⑦ How much money is in seven dimes and two pennies?



⑧ How long?




Day 41

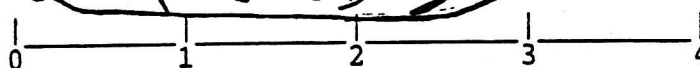
① Write in order, smallest first: 54, 36, 52, 38, 73

② $7 + 5 =$ ③ $700 + 200 =$ ④ $\begin{array}{r} 11 \\ -5 \end{array}$ ⑤ $\begin{array}{r} 750 \\ -250 \end{array}$

⑥ Put in the missing number: 0, 2, 4, 6, 8, 10, 12, 14, __, 18 How much money is in five dimes and three pennies?



⑧ How long?



Day 42

Day 39 #8

Day 40 #8

