

① 
$$\begin{array}{r} 6,278 \\ +1,354 \\ \hline \end{array}$$

② 
$$\begin{array}{r} 59.31 \\ -4.65 \\ \hline \end{array}$$

③ 
$$\begin{array}{r} 27 \\ \times 3 \\ \hline \end{array}$$

④  $48 \div 6 =$  Gr 3 p. 24

⑤ How many angles does a circle have?

⑥  $<, >, =$  12 inches      1 foot

DAY 123

① 
$$\begin{array}{r} \$20.59 \\ +48.73 \\ \hline \end{array}$$

② 
$$\begin{array}{r} 931 \\ -465 \\ \hline \end{array}$$

③ 
$$\begin{array}{r} 37 \\ \times 3 \\ \hline \end{array}$$

④  $81 \div 9 =$

⑤ Persha had 6 blue ribbons and 4 red ribbons. She gave 3 ribbons to Jena. How many red ribbons did she have left? (Answer: You can't tell.)

⑥ How many even numbers are there between 25 and 50?

DAY 124

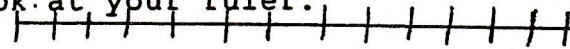
① 
$$\begin{array}{r} 256 \\ +256 \\ \hline \end{array}$$

② 
$$\begin{array}{r} \$5.20 \\ -1.78 \\ \hline \end{array}$$

③ 
$$\begin{array}{r} 21 \\ \times 4 \\ \hline \end{array}$$

④  $7 \overline{)56}$

⑤ Which is longer, 10cm or 4 inches? Look at your ruler.



⑥ Draw a line 8 inches long.

DAY 125


① 
$$\begin{array}{r} \$1.13 \\ 1.24 \\ +2.35 \\ \hline \end{array}$$

② 
$$\begin{array}{r} 635 \\ -297 \\ \hline \end{array}$$

③ 
$$\begin{array}{r} 18 \\ \times 6 \\ \hline \end{array}$$

④  $25 \div 5 =$

⑤ What number is marked on the number line?



⑥















Jeff

John

Jack

Jill

Jane

Who ate the same amount of ice cream cones?



= one ice cream cone

DAY 126

① 
$$\begin{array}{r} 235 \\ 542 \\ +134 \\ \hline \end{array}$$

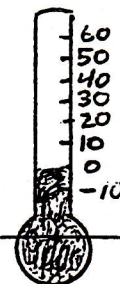
② 
$$\begin{array}{r} \$8.41 \\ -5.69 \\ \hline \end{array}$$

③ 
$$\begin{array}{r} 37 \\ \times 5 \\ \hline \end{array}$$

④  $28 \div 4 =$

⑤ Write in the missing number:  
15, 30, 45,     , 75, 90

⑥ What is the temperature?



DAY 127