












- ①  $7 + 9 =$       ②  $16 - 8 =$       ③ 
$$\begin{array}{r} 53 \\ 34 \\ + 11 \\ \hline \end{array}$$
      ④ 
$$\begin{array}{r} 94 \\ 74 \\ - 72 \\ \hline \end{array}$$
      Gr 3 p. 7
- ⑤ Round 324 to the nearest ten.

⑥

	BOOKS
Mary	   
Travis	 
Traa	    

 = 1 book read










Who read the most books?

DAY 36

- ①  $7 + 8 =$       ②  $17 - 8 =$       ③ 
$$\begin{array}{r} 27 \\ + 62 \\ \hline \end{array}$$
      ④ 
$$\begin{array}{r} 74 \\ - 33 \\ \hline \end{array}$$


- ⑤ Write 8625 as a sum which shows the meaning of each number.

⑥

	Candy Bars Eaten
John	  
Stacey	   
Katy	 

Who ate the most?

DAY 37

 = Candy Bar

- ①  $4 + 8 =$       ②  $13 - 6 =$       ③ 
$$\begin{array}{r} 10 \\ 34 \\ + 25 \\ \hline \end{array}$$
      ④ 
$$\begin{array}{r} 46 \\ - 21 \\ \hline \end{array}$$

- ⑤ Replace the \_\_\_\_\_. Use < for "less than" or > for "greater than".  $5 + 2$  \_\_\_\_\_  $4 + 4$

⑥

Tim	0 0 0
Tony	0 0
Bill	0 0 0 0 0 0 0 0
Tom	0
David	0 0 0 0


0 = 1 cookie

How many cookies did David eat?

DAY 38

- ①  $5 + 7 =$       ②  $19 - 10 =$       ③ 
$$\begin{array}{r} 55 \\ 3 \\ + 31 \\ \hline \end{array}$$
      ④ 
$$\begin{array}{r} 77 \\ - 45 \\ \hline \end{array}$$
- ⑤ Round 485 to the nearest ten.

⑥



What color is the least favorite?

DAY 39

- ①  $8 + 7 =$       ②  $12 - 5 =$       ③ 
$$\begin{array}{r} 39 \\ + 19 \\ \hline \end{array}$$
      ④ 
$$\begin{array}{r} 93 \\ - 22 \\ \hline \end{array}$$

- ⑤ What number is in the tens place? 837      485      831

- ⑥ Draw a house 4 inches tall.

DAY 40