

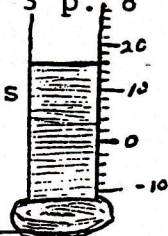
①
$$\begin{array}{r} 59 \\ +22 \\ \hline \end{array}$$

②
$$\begin{array}{r} 60 \\ -23 \\ \hline \end{array}$$


③
$$\begin{array}{r} 6 \\ \times 1 \\ \hline \end{array}$$

④ $2 \overline{)8}$

Grade 3 p. 8



- ⑤ Joyce works 8 hours per day for 5 days, and earns \$4 per hour. How much does she get paid?

- ⑥ What is the temperature Farenheit? 

DAY 41

①
$$\begin{array}{r} 89 \\ + 3 \\ \hline \end{array}$$

②
$$\begin{array}{r} 51 \\ -23 \\ \hline \end{array}$$


③ $3 \times 2 =$

④ $9 \div 3 =$

- ⑤ Dorothy works 8 hours per day for 4 days, and earns \$5 each hour. How many hours does she work?

- ⑥ What is the temperature?

Farenheit



DAY 42

①
$$\begin{array}{r} 53 \\ + 9 \\ \hline \end{array}$$

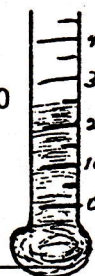
②
$$\begin{array}{r} 61 \\ - 5 \\ \hline \end{array}$$

③ $4 \times 4 =$

④ $10 \div 2 =$

- ⑤ DeAnn works 8 hours per day for 5 days and earns \$30 per day. How much does she earn per hour?

- ⑥ What is the temperature in degrees Celsius?



DAY 43

①
$$\begin{array}{r} 69 \\ + 8 \\ \hline \end{array}$$

②
$$\begin{array}{r} 25 \\ - 9 \\ \hline \end{array}$$

③ $5 \times 5 =$

④ $16 \div 4 =$

- ⑤ Earl works 8 hours per day for 5 days, and earns \$6 per hour. How much does he earn per day?

- ⑥ What is the temperature in degrees Celsius?



DAY 44

①
$$\begin{array}{r} 53 \\ + 8 \\ \hline \end{array}$$


②
$$\begin{array}{r} 20 \\ - 9 \\ \hline \end{array}$$

③
$$\begin{array}{r} 8 \\ \times 2 \\ \hline \end{array}$$

④ $3 \overline{)12}$

- ⑤ Joe works 8 hours per day at \$7 per hour for 9 days. What is his total pay?

⑥



What is the most popular pet?

How many like it?

DAY 45