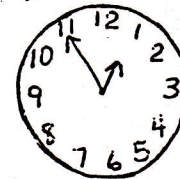


① 
$$\begin{array}{r} \$2.39 \\ +5.14 \\ \hline \end{array}$$

② 
$$\begin{array}{r} 551 \\ -223 \\ \hline \end{array}$$

③ 
$$\begin{array}{r} 9 \\ \times 9 \\ \hline \end{array}$$

④  $7 \overline{)63} =$  Gr. 3 p.12



⑤ Write with words: 361

⑥ What time is it?

DAY 62

① 
$$\begin{array}{r} \$ .62 \\ +.99 \\ \hline \end{array}$$

② 
$$\begin{array}{r} 83 \\ -47 \\ \hline \end{array}$$

③  $6 \times 8 =$

④  $72 \div 9 =$

⑤ Jesse has 25 and his mother gave him \$2.00. How much more does he need to buy a truck that costs \$4.15?

⑥ Which number is in the thousands place? 125,603

DAY 63

① 
$$\begin{array}{r} \$6.49 \\ +1.83 \\ \hline \end{array}$$

② 
$$\begin{array}{r} 75 \\ -48 \\ \hline \end{array}$$

③  $8 \times 3 =$

④  $49 \div 7 =$

⑤ Write the standard number for 9 hundreds no tens and 4 ones.

⑥ Fill in with  $<$ ,  $>$ ,  $=$  75  $\underline{\hspace{1cm}}$  57

DAY 64

① 
$$\begin{array}{r} \$ .79 \\ - .23 \\ \hline \end{array}$$

② 
$$\begin{array}{r} \$ .62 \\ - .35 \\ \hline \end{array}$$

③  $7 \times 8 =$

④  $54 \div 6 =$

⑤  $6 \times \underline{\hspace{1cm}} = 48$

⑥ Write the even numbers from 1 to 10.

DAY 65

① 
$$\begin{array}{r} \$7.43 \\ +2.85 \\ \hline \end{array}$$

② 
$$\begin{array}{r} \$2.54 \\ -1.42 \\ \hline \end{array}$$


③  $8 \times 5 =$

④  $63 \div 7 =$

⑤ Write with words: 209

⑥ What fraction is shaded?

⑦ How long is the line to the nearest cm?




DAY 66

① 
$$\begin{array}{r} \$9.57 \\ +4.25 \\ \hline \end{array}$$

② 
$$\begin{array}{r} 633 \\ -498 \\ \hline \end{array}$$

③ 
$$\begin{array}{r} 9 \\ \times 6 \\ \hline \end{array}$$

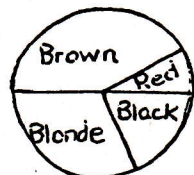
④  $48 \div 8 =$



⑤ Joe has 6 boxes of pencils. If each box has 8 pencils, how many pencils does he have?

⑥ What fraction is colored?

⑦ What color of hair is the most common?  $\rightarrow$



DAY 67

