


①
$$\begin{array}{r} 5,642 \\ +1,354 \\ \hline \end{array}$$

②
$$\begin{array}{r} \$8.76 \\ -5.42 \\ \hline \end{array}$$

③
$$\begin{array}{r} 56 \\ \times 7 \\ \hline \end{array}$$

④ $3 \overline{)18} =$ Gr 3 p. 16

⑤ Write 89 with words.



⑥ Draw a line three inches long.

DAY 83

①
$$\begin{array}{r} 94 \\ 53 \\ +12 \\ \hline \end{array}$$

②
$$\begin{array}{r} 856 \\ -799 \\ \hline \end{array}$$

③
$$\begin{array}{r} 3 \\ \times 6 \\ \hline +6 \end{array}$$

④ $6 \overline{)60}$

⑤ What day of the week will it be 2 weeks from today?

⑥ Boys Girls

5	10	15	20

 How many girls?

DAY 84

①
$$\begin{array}{r} \$1.39 \\ +5.46 \\ \hline \end{array}$$


②
$$\begin{array}{r} \$1.41 \\ -0.98 \\ \hline \end{array}$$

③
$$\begin{array}{r} 7 \\ \times 8 \\ \hline + 4 \end{array}$$

④ $8 \overline{)24}$

⑤ What month will it be 100 days from now?

⑥ What is the temperature in degrees celsius?



DAY 85

①
$$\begin{array}{r} 16 \\ 24 \\ 10 \\ 39 \\ +41 \\ \hline \end{array}$$

②
$$\begin{array}{r} \$10.00 \\ - 7.98 \\ \hline \end{array}$$

③
$$\begin{array}{r} 9 \\ \times 8 \\ \hline + 2 \end{array}$$

④ $8 \overline{)56}$

⑤ If Herb earns \$7 per hour, and works 6 days per week 5 hours per day, how much does Herb earn per week?

⑥ $16 + \underline{\quad} = 25$

DAY 86

①
$$\begin{array}{r} \$23.05 \\ + 1.09 \\ \hline \end{array}$$

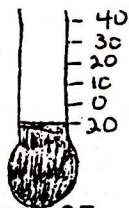
②
$$\begin{array}{r} 4705 \\ -2813 \\ \hline \end{array}$$

③
$$\begin{array}{r} 3 \\ \times 7 \\ \hline + 9 \end{array}$$

④ $9 \overline{)9}$

⑤ If Herb earns \$5 per hour, and works 7 days per week, 6 hours per day, how much does Herb earn per day?

⑥ What is the temperature in degrees celsius?



DAY 87